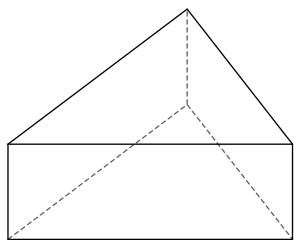


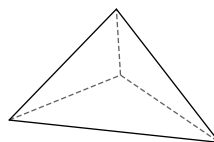
# Geometry - Homework 12 - Spring

**Name each figure.**

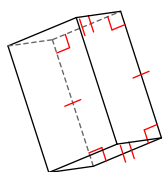
1)



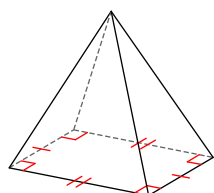
2)



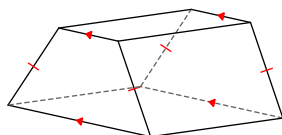
3)



4)

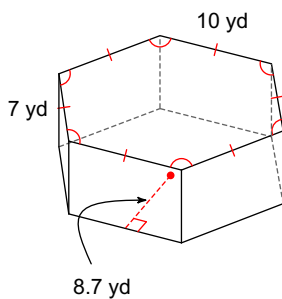


5)

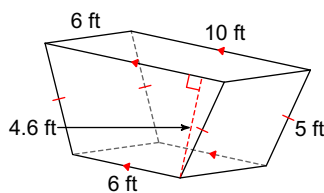


**Find the volume of each figure. Round your answers to the nearest hundredth, if necessary.**

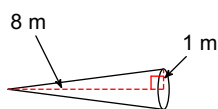
6)



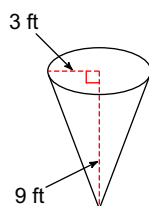
7)



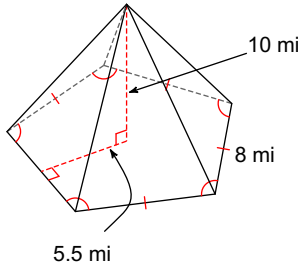
8)



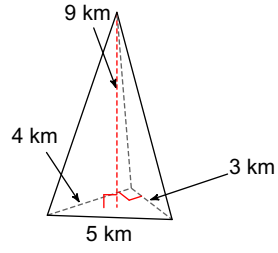
9)



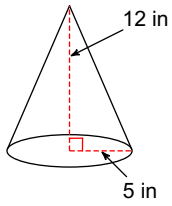
10)



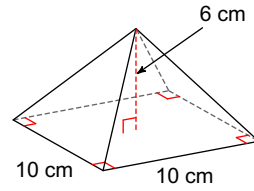
11)



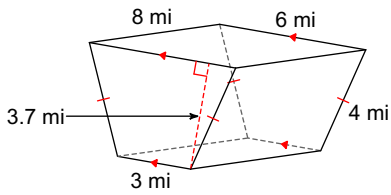
12)



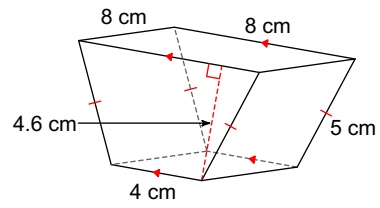
13)



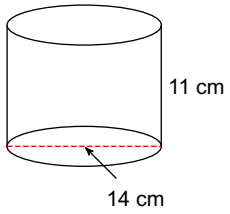
14)



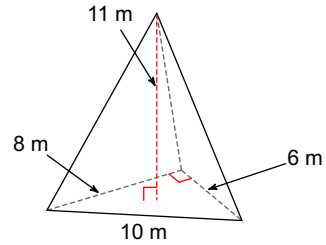
15)



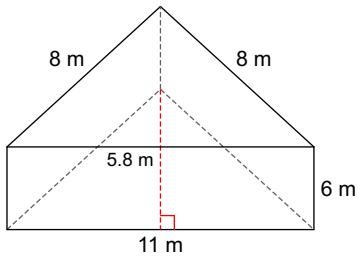
16)



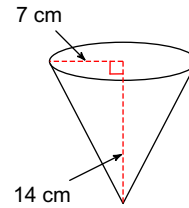
17)



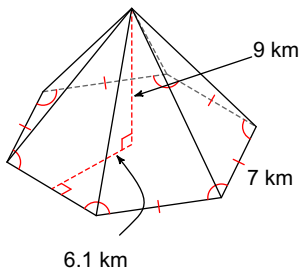
18)



19)



20)



## Answers to Geometry - Homework 12 - Spring

1) triangular prism  
9)  $84.82 \text{ ft}^3$   
17)  $88 \text{ m}^3$

3) rectangular prism  
11)  $18 \text{ km}^3$   
19)  $718.38 \text{ cm}^3$

5) trapezoidal prism  
13)  $200 \text{ cm}^3$

7)  $220.8 \text{ ft}^3$   
15)  $220.8 \text{ cm}^3$