

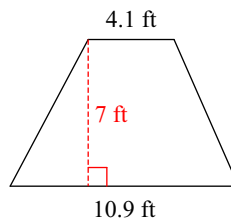
Geometry - Homework 26

Find the area of each.

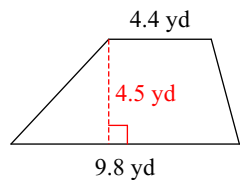
1)



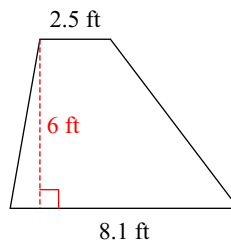
2)



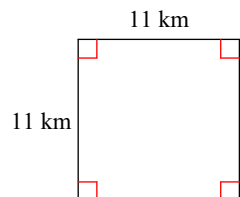
3)



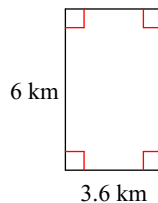
4)



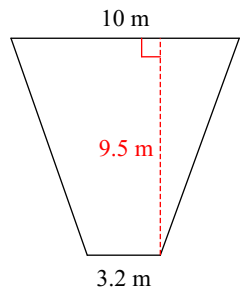
5)



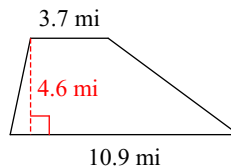
6)



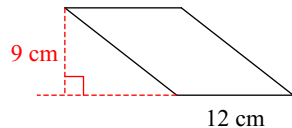
7)



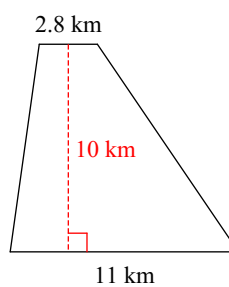
8)



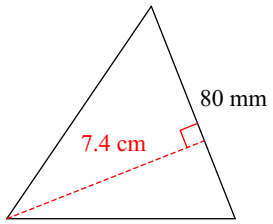
9)



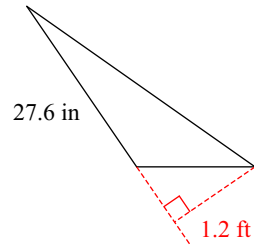
10)



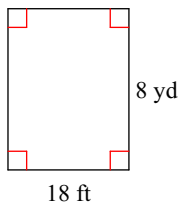
11)



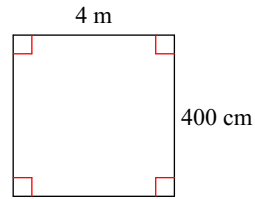
12)



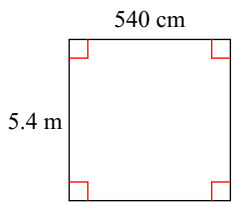
13)



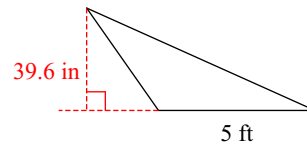
14)



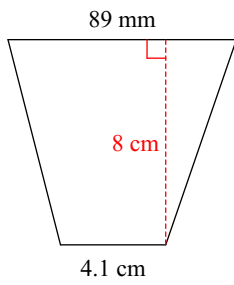
15)



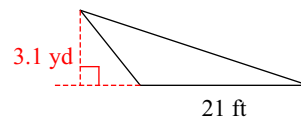
16)



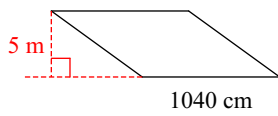
17)



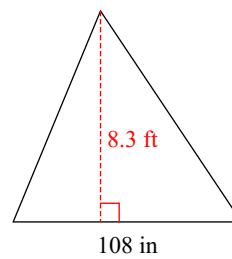
18)



19)

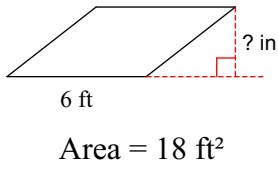


20)

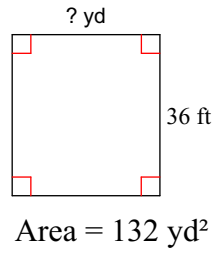


Find the missing measurement. Round your answer to the nearest tenth. Take care to use the correct units.

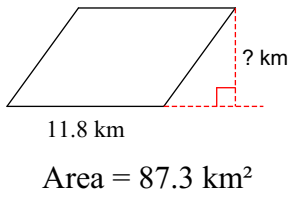
21)



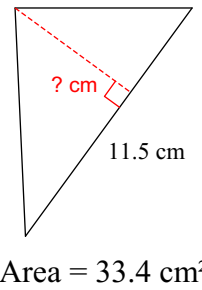
22)



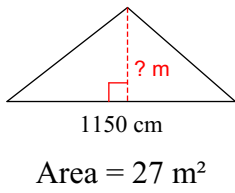
23)



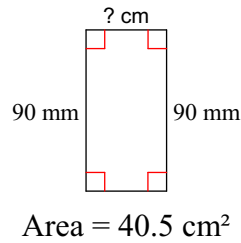
24)



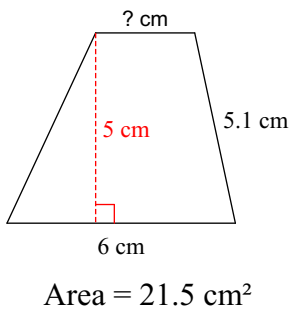
25)



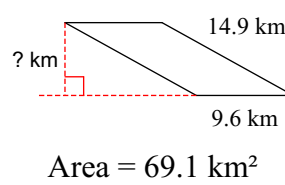
26)



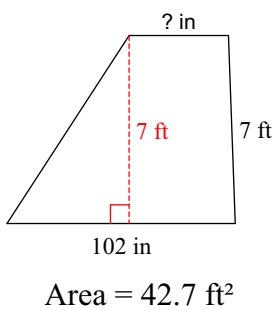
27)



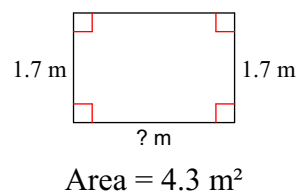
28)



29)



30)



Answers to Geometry - Homework 26

1) 10 km^2

9) 108 cm^2

17) 52 cm^2

25) 4.7 m

3) 31.95 yd^2

11) 29.6 cm^2

19) 52 m^2

27) 2.6 cm

5) 121 km^2

13) 48 yd^2

21) 36 in

29) 44.4 in

7) 62.7 m^2

15) 29.16 m^2

23) 7.4 km