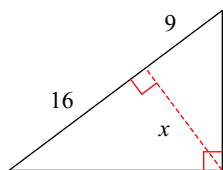


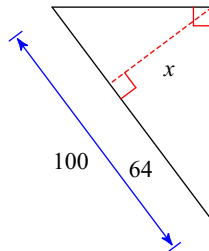
Geometry - Homework 2 - Spring

Find the missing length indicated. Leave your answer in simplest radical form.

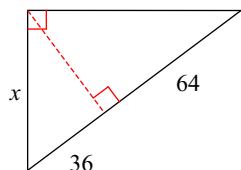
1)



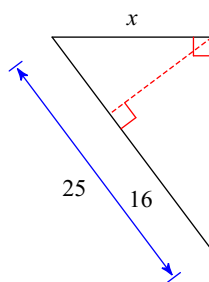
2)



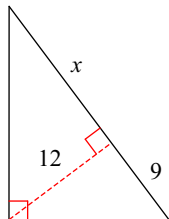
3)



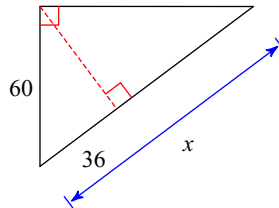
4)



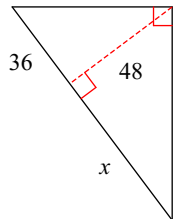
5)



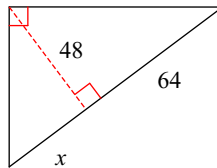
6)



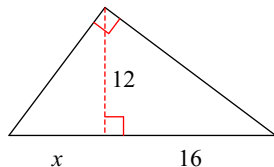
7)



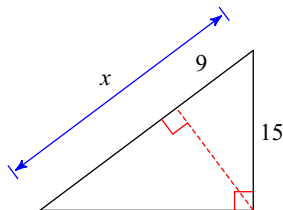
8)



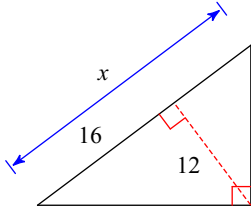
9)



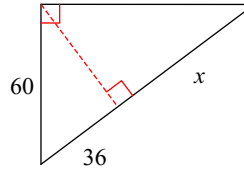
10)



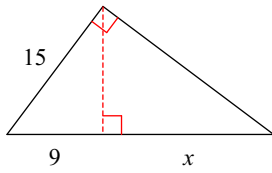
11)



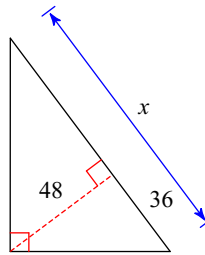
12)



13)

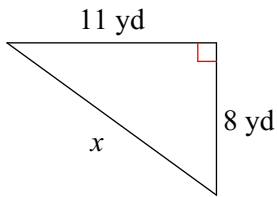


14)

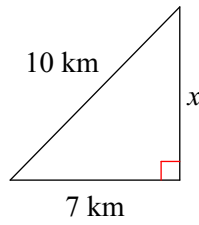


Find the missing side of each triangle. Leave your answers in simplest radical form.

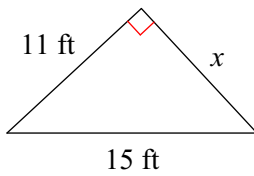
15)



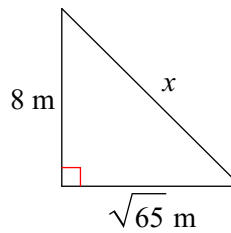
16)



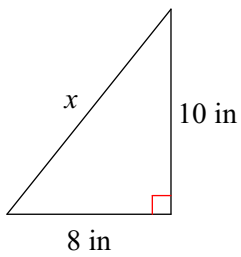
17)



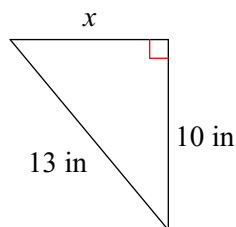
18)



19)



20)



Answers to Geometry - Homework 2 - Spring

1) 12

9) 9

17) $2\sqrt{26}$ ft

3) 60

11) 25

19) $2\sqrt{41}$ in

5) 16

13) 16

7) 64

15) $\sqrt{185}$ yd