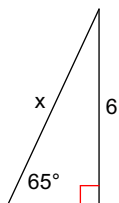


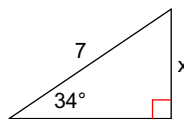
Geometry - Homework 37

Find the missing side. Round to the nearest tenth.

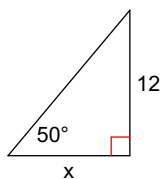
1)



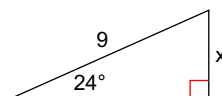
2)



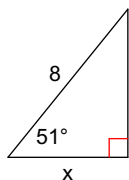
3)



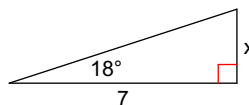
4)



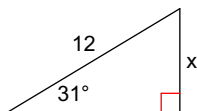
5)



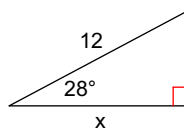
6)



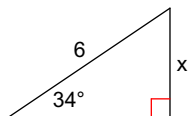
7)



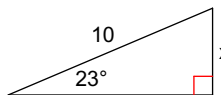
8)



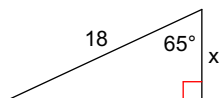
9)



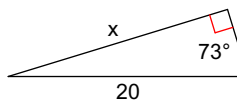
10)



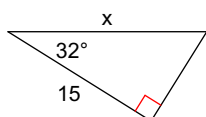
11)



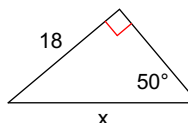
12)



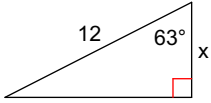
13)



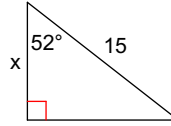
14)



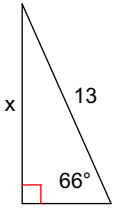
15)



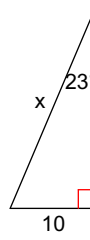
16)



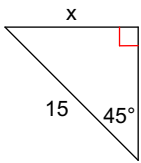
17)



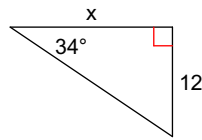
18)



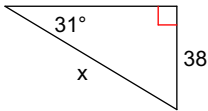
19)



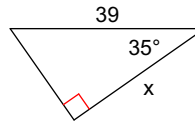
20)



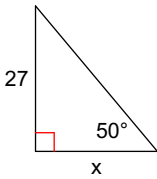
21)



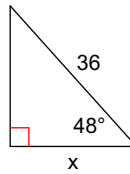
22)



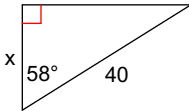
23)



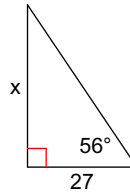
24)



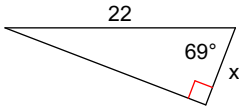
25)



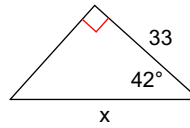
26)



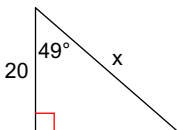
27)



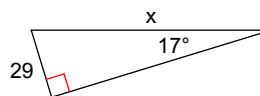
28)



29)



30)



Answers to Geometry - Homework 37

1) 6.6
9) 3.4
17) 11.9
25) 21.2

3) 10.1
11) 7.6
19) 10.6
27) 7.9

5) 5.0
13) 17.7
21) 73.8
29) 30.5

7) 6.2
15) 5.4
23) 22.7