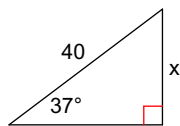


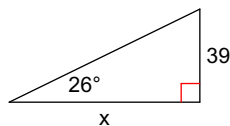
Geometry - Homework 8 - Spring

Find the missing side. Round to the nearest tenth.

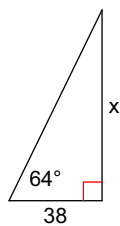
1)



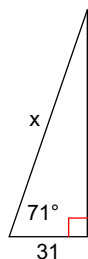
2)



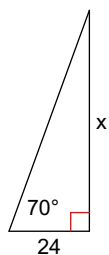
3)



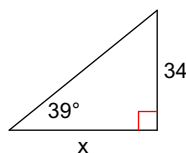
4)



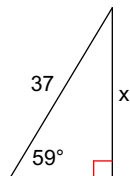
5)



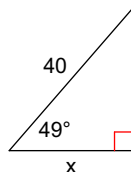
6)



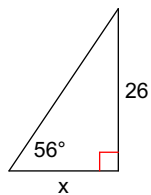
7)



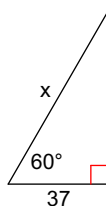
8)



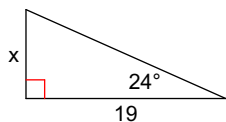
9)



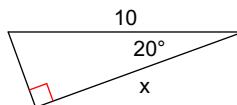
10)



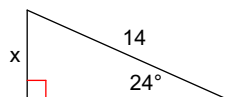
11)



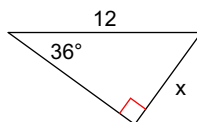
12)

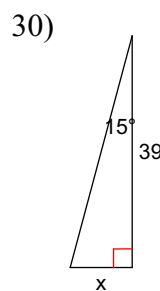
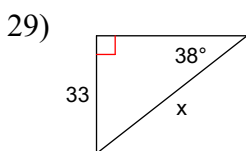
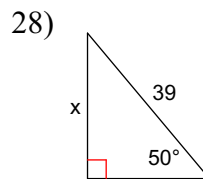
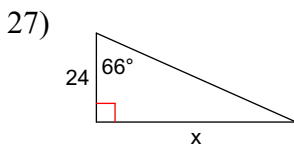
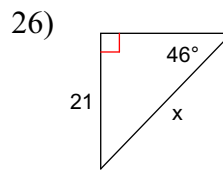
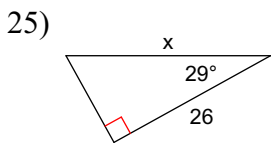
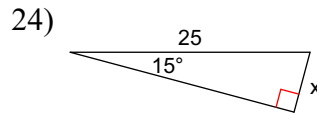
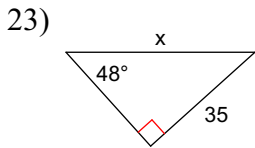
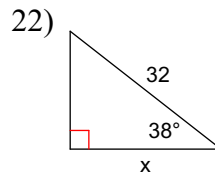
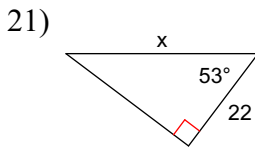
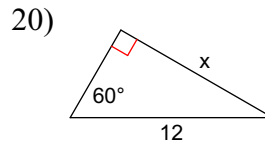
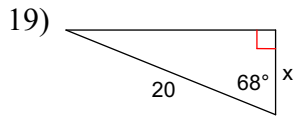
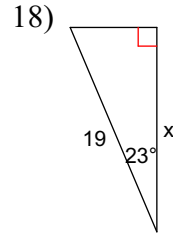
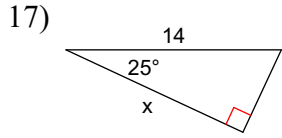
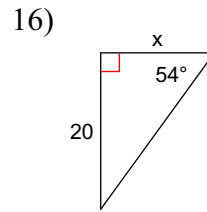
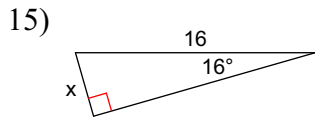


13)



14)





Answers to Geometry - Homework 8 - Spring

1) 24.1

9) 17.5

17) 12.7

25) 29.7

3) 77.9

11) 8.5

19) 7.5

27) 53.9

5) 65.9

13) 5.7

21) 36.6

29) 53.6

7) 31.7

15) 4.4

23) 47.1